

WU Stamp	Monday's Warm-up
Part. Score	Khan Academy Score
WU Stamp	Tuesday's Warm-up
Part. Score	
WU Stamp	Wednesday's Warm-up
Part. Score	
WU Stamp	Thursday's Warm-up
Part. Score	
WU Stamp	Friday's Warm-up
Part. Score	

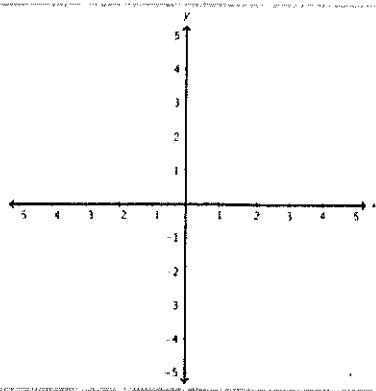
Exit Slip Score	HW Score	Part. Score	WU Score	Comments:
--------------------	-------------	----------------	-------------	-----------

Graphing Quadratics

Name: _____

Find the key features of each quadratic, then graph! Bonus: If your answers are right, the matching letters will unscramble to reveal a very, very important note. (Hint: *The horn is no joke*)

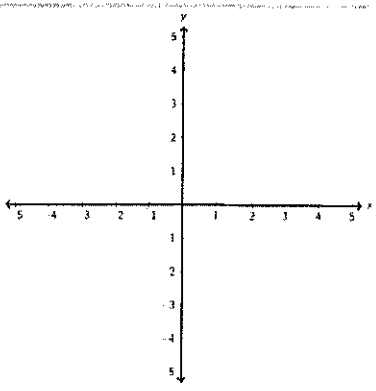
#1 $f(x) = -2x^2 + 8x - 4$
 y-intercept: -4
 Axis of symmetry:
 Min. / max.:
 $f(3) =$



Answer Bank

D -3 M -4 E 4 S 2 A 0 H -2 P -1 N 1

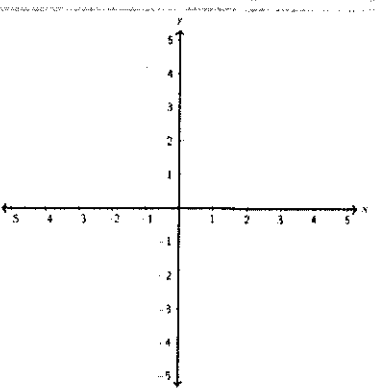
#2 $f(x) = x^2 - 2x - 3$
 y-intercept:
 Axis of symmetry:
 Min. / max.:
 $f(-1) =$



Answer Bank

W -3 B -2 T 1 m -1 L 2 H -4 S 4 I 0

#3 $f(x) = -x^2 - 4x - 1$
 y-intercept:
 Axis of symmetry:
 Min. / max.:
 $f(-3) =$



Answer Bank

OR 3 TO 4 IC -2 ES -5 UN -1 NS 2 RN 1 AN 0

BONUS SCRAMBLE

#1 Letters <u> M </u> <u> S </u>	#2 Letters _____	#3 Letters _____
Unscrambled <u> M </u> <u> S </u>	Unscrambled _____	Unscrambled _____

Answer: DONT M S (#1) _____ (#2) MY _____ (#3)